

A K M PUBLIC SCHOOL
FIRST SEMESTER EXAMINATION (SAMPLE QUESTION PAPER)
MATHEMATICS

CLASS: UKG

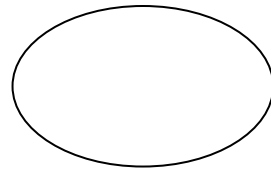

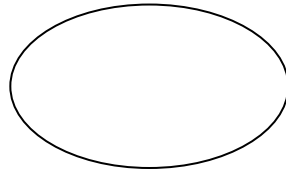

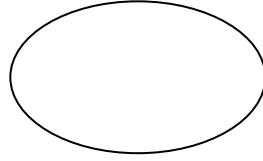
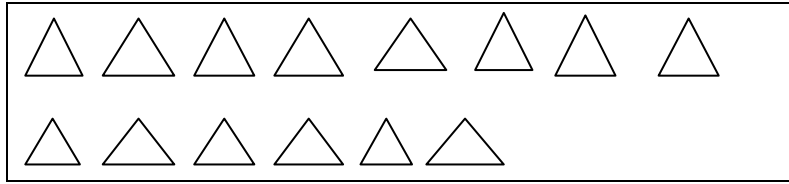
TIME: 2Hrs
MARK: 50

NAME:.....

DIV:.....

1. Count and write

(2x3=6)



2. Write the missing numbers

(1/2 x 10=5)

a) 70 72 73 76 78 80

b) 91 92 95 96 99 100

3. Write the number names of the following numbers

(2x5=10)

a) 50 -

b) 64 -

c) 75 -

d) 80 -

e) 100 -

4. Write the numbers of the following number names

(2x5=10)

a) Forty -

b) Fifty eight -

c) Sixty two -

d) Seventy five -

e) Ninety nine -

5. Write the numbers that comes after

(1x3=3)

9	
----------	--

16	
-----------	--

78	
-----------	--

6. Write the number that comes between

(1x4=4)

13		15
----	--	----

21		23
----	--	----

55		57
----	--	----

76		78
----	--	----

7. Circle the bigger number

(1x4=4)

8
7

51
61

40
30

49
50

8. Circle the smaller number

(1x4=4)

13
15


12
9

15
25

32
13

9. Match the following

(1x4=4)

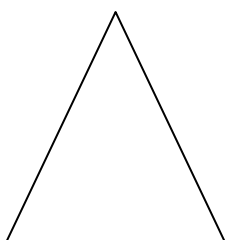


Rectangle



Circle

Square



Triangle